



Is the number of squares an odd or even?



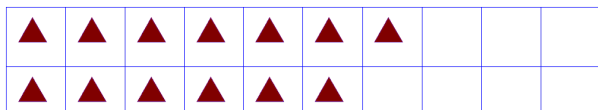
Odd      Even

Is the number of octagons an odd or even?



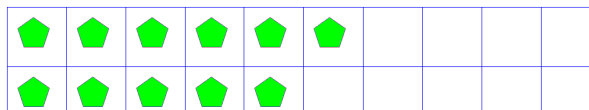
Odd      Even

Is the number of triangles an odd or even?




Odd      Even

Is the number of pentagons an odd or even?



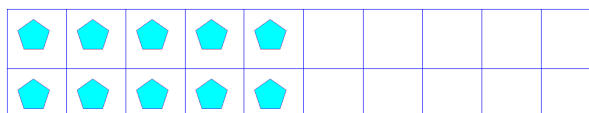
Odd      Even

Is the number of circles an odd or even?



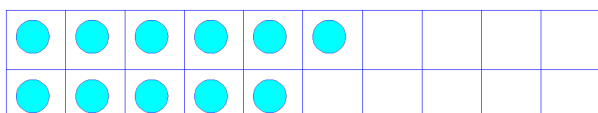
Odd      Even

Is the number of pentagons an odd or even?



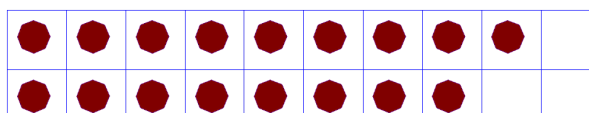
Odd      Even

Is the number of circles an odd or even?




Odd      Even

Is the number of octagons an odd or even?



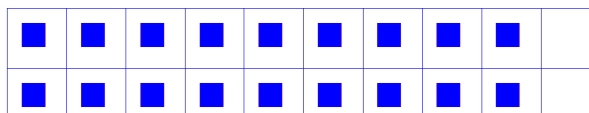
Odd      Even

Is the number of triangles an odd or even?




Odd      Even

Is the number of squares an odd or even?



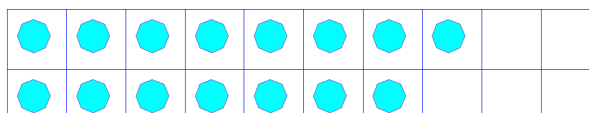
Odd      Even

Is the number of circles an odd or even?



Odd      Even

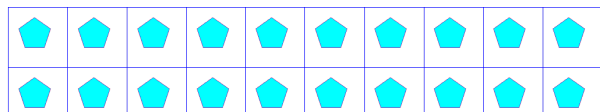
Is the number of octagons an odd or even?



Odd      Even

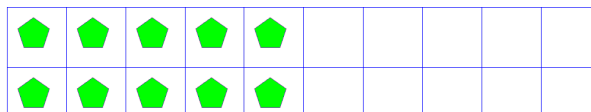


Is the number of pentagons an odd or even?



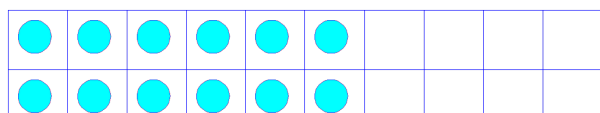
Odd      Even

Is the number of pentagons an odd or even?



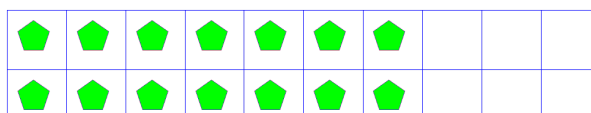
Odd      Even

Is the number of circles an odd or even?




Odd      Even

Is the number of pentagons an odd or even?




Odd      Even

Is the number of pentagons an odd or even?




Odd      Even

Is the number of squares an odd or even?



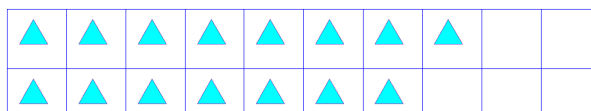
Odd      Even

Is the number of circles an odd or even?



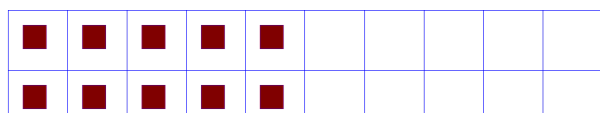
Odd      Even

Is the number of triangles an odd or even?



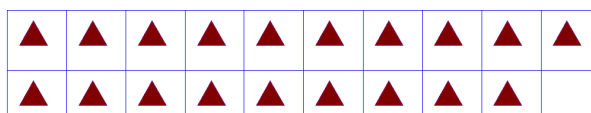
Odd      Even

Is the number of squares an odd or even?



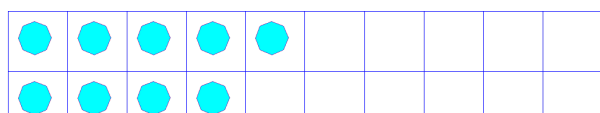
Odd      Even

Is the number of triangles an odd or even?



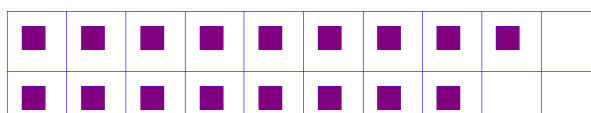
Odd      Even

Is the number of octagons an odd or even?




Odd      Even

Is the number of squares an odd or even?



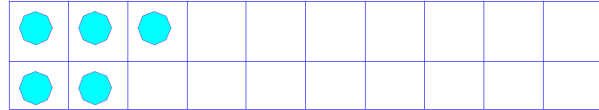
Odd      Even

Is the number of squares an odd or even?



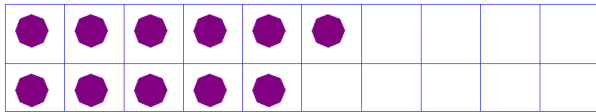
Odd      Even

Is the number of octagons an odd or even?




Odd      Even

Is the number of octagons an odd or even?



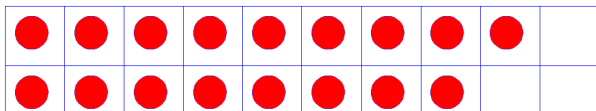
Odd      Even

Is the number of triangles an odd or even?



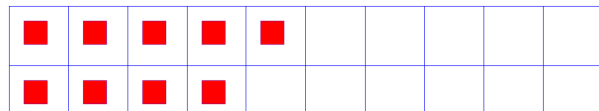
Odd      Even

Is the number of circles an odd or even?




Odd      Even

Is the number of squares an odd or even?



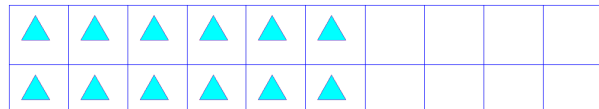
Odd      Even

Is the number of octagons an odd or even?




Odd      Even

Is the number of triangles an odd or even?



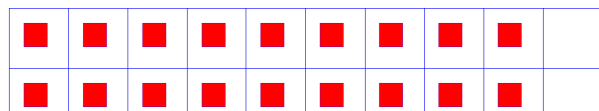
Odd      Even

Is the number of pentagons an odd or even?




Odd      Even

Is the number of squares an odd or even?



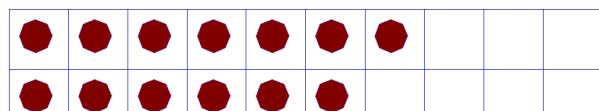
Odd      Even

Is the number of triangles an odd or even?



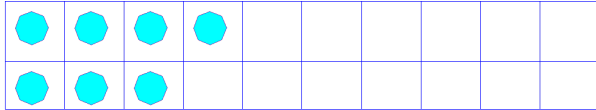
Odd      Even

Is the number of octagons an odd or even?



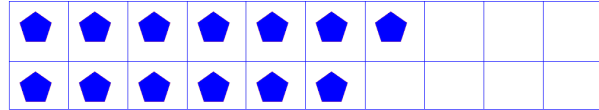
Odd      Even

Is the number of octagons an odd or even?



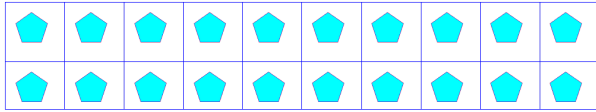
Odd      Even

Is the number of pentagons an odd or even?



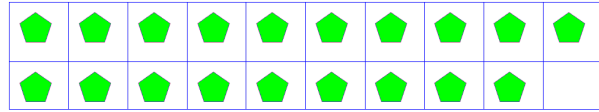
Odd      Even

Is the number of pentagons an odd or even?




Odd      Even

Is the number of pentagons an odd or even?



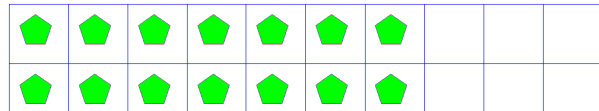
Odd      Even

Is the number of octagons an odd or even?



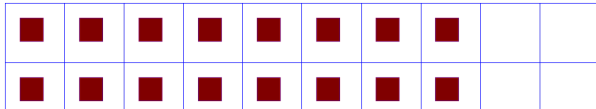
Odd      Even

Is the number of pentagons an odd or even?



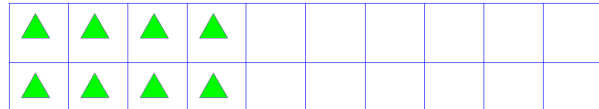
Odd      Even

Is the number of squares an odd or even?



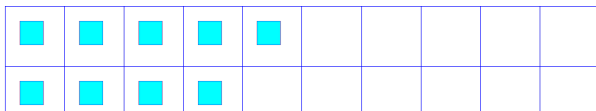
Odd      Even

Is the number of triangles an odd or even?



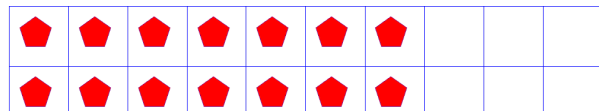
Odd      Even

Is the number of squares an odd or even?



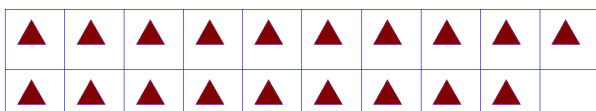
Odd      Even

Is the number of pentagons an odd or even?




Odd      Even

Is the number of triangles an odd or even?



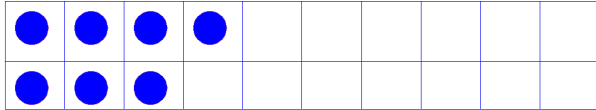
Odd      Even

Is the number of octagons an odd or even?



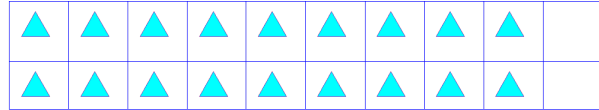
Odd      Even

Is the number of circles an odd or even?



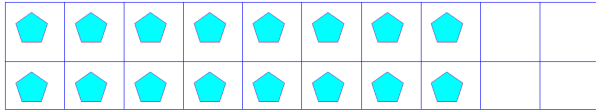
Odd      Even

Is the number of triangles an odd or even?



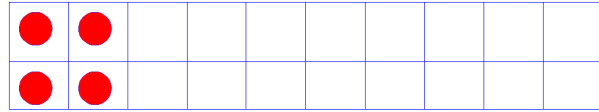
Odd      Even

Is the number of pentagons an odd or even?



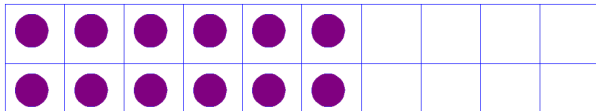
Odd      Even

Is the number of circles an odd or even?



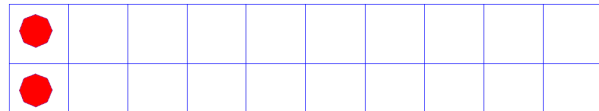
Odd      Even

Is the number of circles an odd or even?




Odd      Even

Is the number of octagons an odd or even?



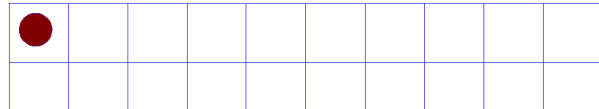
Odd      Even

Is the number of squares an odd or even?




Odd      Even

Is the number of circles an odd or even?




Odd      Even

Is the number of triangles an odd or even?



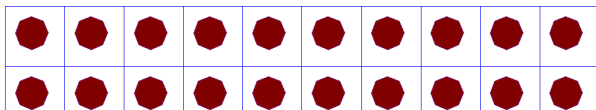
Odd      Even

Is the number of squares an odd or even?




Odd      Even

Is the number of octagons an odd or even?



Odd      Even

Is the number of circles an odd or even?



Odd      Even

