


Calculate the result for the following addition.




tens + ones Complete the addition sentence $76+5=$

Calculate the result for the following addition.



tens + ones Complete the addition sentence $55+8=$


Calculate the result for the following addition.



tens + ones Complete the addition sentence $24+7=$


--	--	--	--

Calculate the result for the following addition.




<input type="text"/>	tens +	<input type="text"/>	ones Complete the addition sentence $74+8=$	<input type="text"/>
----------------------	--------	----------------------	---	----------------------

Calculate the result for the following addition.




<input type="text"/>	tens +	<input type="text"/>	ones Complete the addition sentence $43+8=$	<input type="text"/>
----------------------	--------	----------------------	---	----------------------

Calculate the result for the following addition.



<input type="text"/>	tens +	<input type="text"/>	ones Complete the addition sentence $34+8=$	<input type="text"/>
----------------------	--------	----------------------	---	----------------------


Calculate the result for the following addition.



tens +

ones Complete the addition sentence $35+6=$

Calculate the result for the following addition.



tens +

ones Complete the addition sentence $58+4=$


Calculate the result for the following addition.



tens +


ones Complete the addition sentence $35+9=$

Calculate the result for the following addition.




<input type="text"/>	tens +	<input type="text"/>	ones Complete the addition sentence $36+7=$	<input type="text"/>
----------------------	--------	----------------------	---	----------------------

Calculate the result for the following addition.




<input type="text"/>	tens +	<input type="text"/>	ones Complete the addition sentence $59+8=$	<input type="text"/>
----------------------	--------	----------------------	---	----------------------

Calculate the result for the following addition.




<input type="text"/>	tens +	<input type="text"/>	ones Complete the addition sentence $18+4=$	<input type="text"/>
----------------------	--------	----------------------	---	----------------------

Calculate the result for the following addition.




tens + ones Complete the addition sentence $58+9=$

Calculate the result for the following addition.



tens + ones Complete the addition sentence $59+3=$

Calculate the result for the following addition.



tens + ones Complete the addition sentence $89+5=$

