

Calculate the result for the following subtraction.



$$\begin{array}{r} 4 \\ - 3 \\ \hline \end{array}$$

Calculate the result for the following subtraction.



$$\begin{array}{r} 2 \\ - 1 \\ \hline \end{array}$$

Calculate the result for the following subtraction.



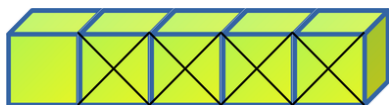
$$\begin{array}{r} 8 \\ - 7 \\ \hline \end{array}$$

Calculate the result for the following subtraction.



$$\begin{array}{r} 3 \\ - 1 \\ \hline \end{array}$$

Calculate the result for the following subtraction.



$$\begin{array}{r} 5 \\ - 4 \\ \hline \end{array}$$

Calculate the result for the following subtraction.



$$\begin{array}{r} 6 \\ - 4 \\ \hline \end{array}$$

Calculate the result for the following subtraction.



$$\begin{array}{r} 10 \\ - 9 \\ \hline \end{array}$$

Calculate the result for the following subtraction.



$$\begin{array}{r} 6 \\ - 2 \\ \hline \end{array}$$

Calculate the result for the following subtraction.



$$\begin{array}{r} 4 \\ - 3 \\ \hline \end{array}$$

Calculate the result for the following subtraction.



$$\begin{array}{r} 7 \\ - 6 \\ \hline \end{array}$$

Calculate the result for the following subtraction.



$$\begin{array}{r} 2 \\ - 1 \\ \hline \end{array}$$

Calculate the result for the following subtraction.



$$\begin{array}{r} 7 \\ - 1 \\ \hline \end{array}$$

Calculate the result for the following subtraction.




$$\begin{array}{r} 9 \\ - 1 \\ \hline \end{array}$$

Calculate the result for the following subtraction.



$$\begin{array}{r} 3 \\ - 2 \\ \hline \end{array}$$

Calculate the result for the following subtraction.



$$\begin{array}{r} 5 \\ - 1 \\ \hline \end{array}$$

Calculate the result for the following subtraction.



$$\begin{array}{r} 10 \\ - 1 \\ \hline \end{array}$$

Calculate the result for the following

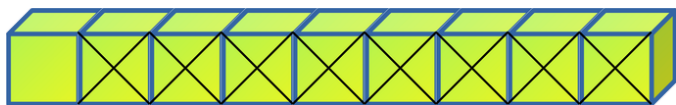
Calculate the result for the following subtraction.

subtraction.


$$\begin{array}{r} 4 \\ - 3 \\ \hline \end{array}$$



$$\begin{array}{r} 8 \\ - 3 \\ \hline \end{array}$$

Calculate the result for the following subtraction.

$$\begin{array}{r} 9 \\ - 8 \\ \hline \end{array}$$

Calculate the result for the following subtraction.

$$\begin{array}{r} 3 \\ - 1 \\ \hline \end{array}$$