

Write the subtraction sentence based on what the picture shows?



8-1=7

8-7=1

7-6=1

9-2=7

5-4=1

5-1=4

Write the subtraction sentence based on what the picture shows?



4-3=1

9-7=2

4-2=2

7-4=3

8-7=1

5-3=2

Write the subtraction sentence based on what the picture shows?



6-3=3

5-2=3

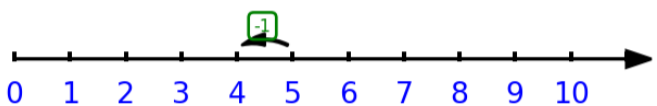
4-1=3

8-4=4

7-3=4

5-1=4

Write the subtraction sentence based on what the picture shows?



7-1=6

5-1=4

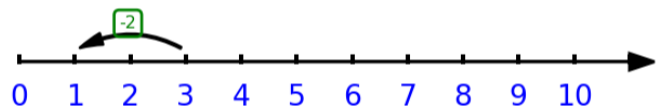
4-3=1

7-3=4

7-4=3

9-1=8

Write the subtraction sentence based on what the picture shows?



8-7=1

6-4=2

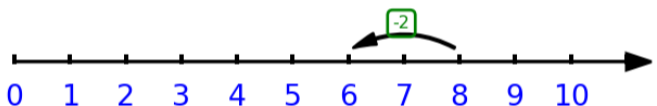
6-5=1

9-7=2

6-3=3

3-2=1

Write the subtraction sentence based on what the picture shows?



7-4=3

8-2=6

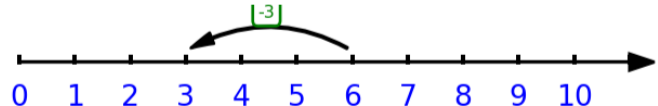
5-3=2

3-2=1

2-1=1

3-1=2

Write the subtraction sentence based on what the picture shows?



6-3=3

8-6=2

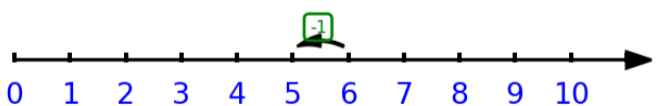
9-2=7

3-2=1

5-2=3

7-6=1

Write the subtraction sentence based on what the picture shows?



6-1=5

7-1=6

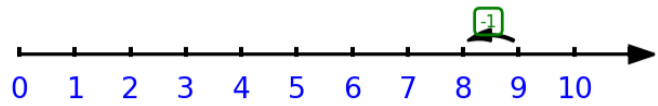
9-8=1

8-5=3

7-3=4

4-2=2

Write the subtraction sentence based on what the picture shows?



8-4=4

7-1=6

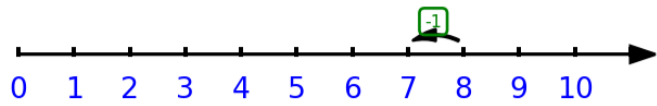
7-6=1

4-1=3

9-1=8

6-1=5

Write the subtraction sentence based on what the picture shows?



7-4=3

6-2=4

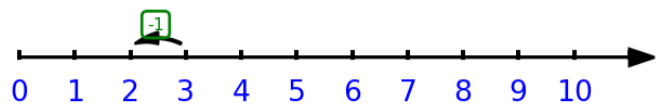
8-1=7

6-1=5

8-7=1

5-3=2

Write the subtraction sentence based on what the picture shows?



7-3=4

9-8=1

7-5=2

3-1=2

8-4=4

Write the subtraction sentence based on what the picture shows?



10-2=8

8-6=2

8-4=4

6-4=2

7-6=1

9-7=2

Write the subtraction sentence based on what the picture shows?



8-5=3

5-4=1

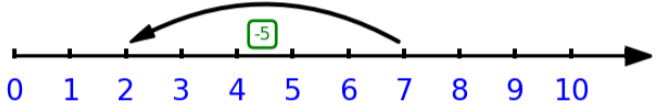
9-2=7

8-1=7

3-2=1

7-2=5

Write the subtraction sentence based on what the picture shows?



9-8=1

6-5=1

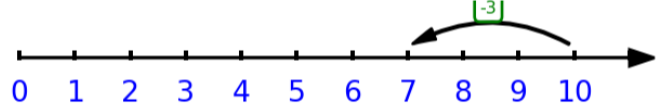
4-2=2

7-6=1

4-3=1

7-5=2

Write the subtraction sentence based on what the picture shows?



7-5=2

9-6=3

9-4=5

10-3=7

9-5=4

4-3=1

Write the subtraction sentence based on what the picture shows?



8-3=5

5-3=2

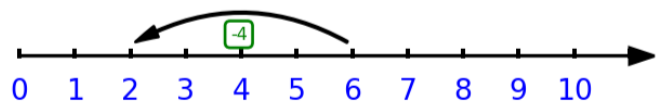
10-2=8

4-2=2

9-7=2

6-3=3

Write the subtraction sentence based on what the picture shows?



6-4=2

8-3=5

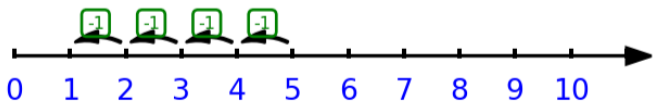
4-3=1

3-2=1

7-4=3

9-1=8

Write the subtraction sentence based on what the picture shows?



6-4=2

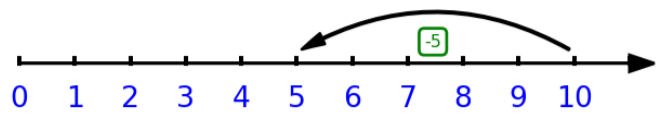
9-1=8

5-4=1

9-4=5

5-2=3

Write the subtraction sentence based on what the picture shows?



5-1=4

10-5=5

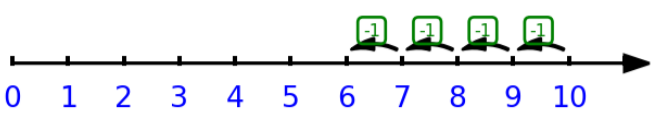
4-3=1

8-3=5

9-5=4

7-6=1

Write the subtraction sentence based on what the picture shows?



9-4=5

8-2=6

8-4=4

10-4=6

9-3=6

5-1=4